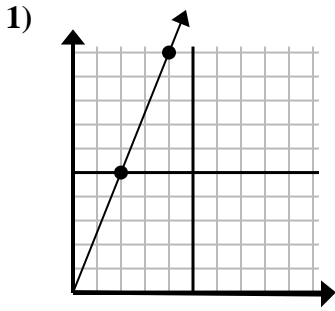
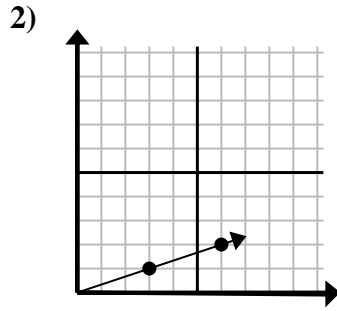


Determine which choice represents a point on the line if it were to continue.

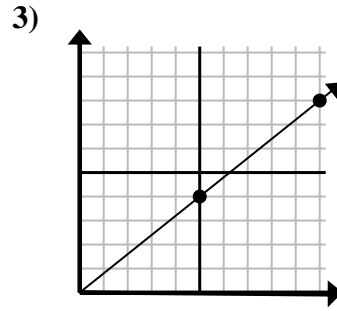
Answers



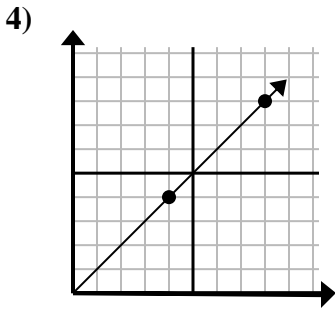
- A. (12, 30)
- B. (8, 20)
- C. (8, 10)
- D. (6, 15)



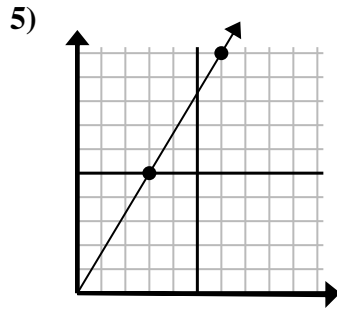
- A. (9, 3)
- B. (10, 6)
- C. (15, 5)
- D. (18, 6)



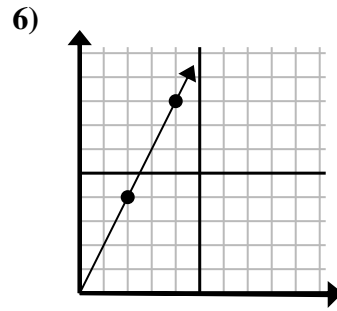
- A. (11, 9)
- B. (15, 12)
- C. (20, 16)
- D. (25, 20)



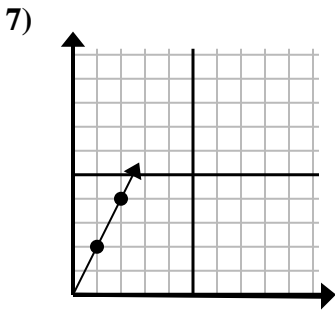
- A. (16, 16)
- B. (12, 12)
- C. (13, 5)
- D. (28, 28)



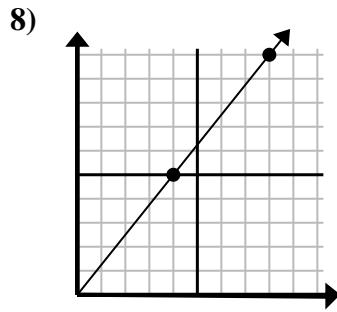
- A. (8, 10)
- B. (15, 25)
- C. (7, 6)
- D. (9, 15)



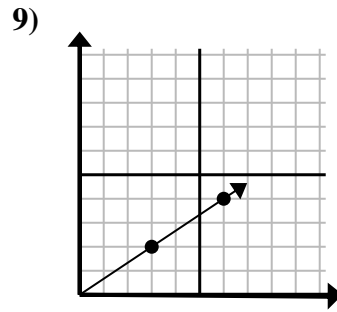
- A. (6, 5)
- B. (6, 12)
- C. (12, 24)
- D. (8, 16)



- A. (4, 6)
- B. (6, 12)
- C. (3, 6)
- D. (5, 7)

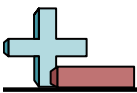


- A. (9, 10)
- B. (12, 15)
- C. (20, 25)
- D. (24, 30)



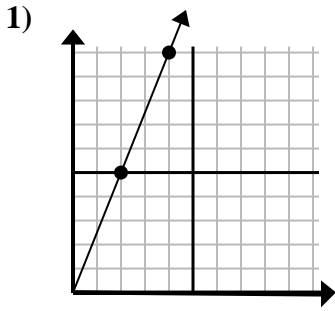
- A. (18, 12)
- B. (8, 7)
- C. (11, 5)
- D. (9, 6)

1. \_\_\_\_\_
2. \_\_\_\_\_
3. \_\_\_\_\_
4. \_\_\_\_\_
5. \_\_\_\_\_
6. \_\_\_\_\_
7. \_\_\_\_\_
8. \_\_\_\_\_
9. \_\_\_\_\_

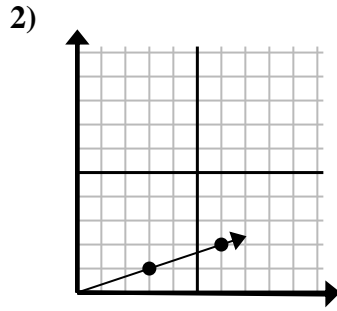


Determine which choice represents a point on the line if it were to continue.

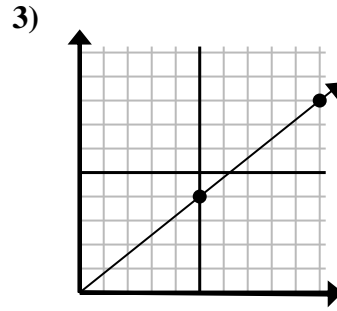
Answers



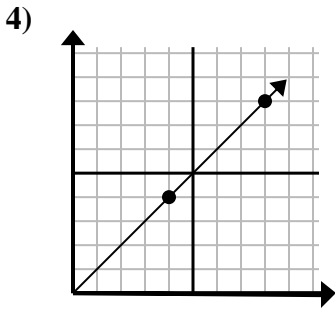
- A. (12, 30)
- B. (8, 20)
- C. (8, 10)
- D. (6, 15)



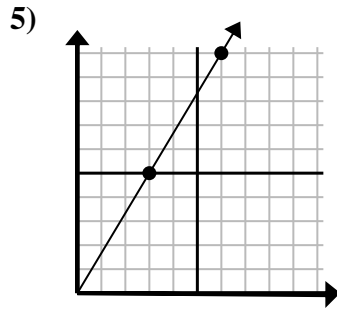
- A. (9, 3)
- B. (10, 6)
- C. (15, 5)
- D. (18, 6)



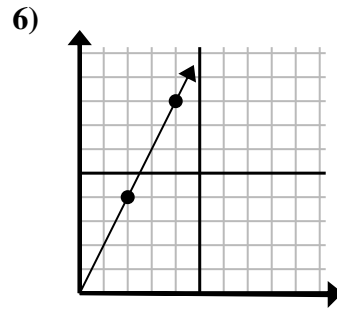
- A. (11, 9)
- B. (15, 12)
- C. (20, 16)
- D. (25, 20)



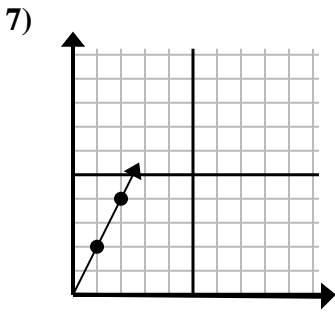
- A. (16, 16)
- B. (12, 12)
- C. (13, 5)
- D. (28, 28)



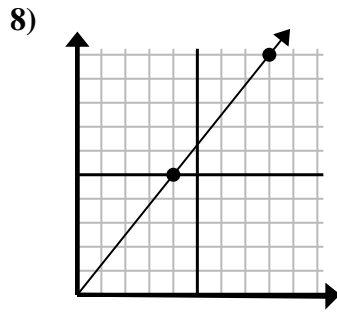
- A. (8, 10)
- B. (15, 25)
- C. (7, 6)
- D. (9, 15)



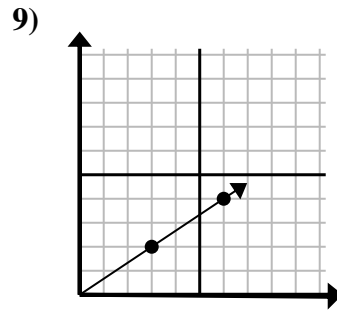
- A. (6, 5)
- B. (6, 12)
- C. (12, 24)
- D. (8, 16)



- A. (4, 6)
- B. (6, 12)
- C. (3, 6)
- D. (5, 7)



- A. (9, 10)
- B. (12, 15)
- C. (20, 25)
- D. (24, 30)



- A. (18, 12)
- B. (8, 7)
- C. (11, 5)
- D. (9, 6)

- 1. **D**
- 2. **A**
- 3. **B**
- 4. **B**
- 5. **D**
- 6. **B**
- 7. **C**
- 8. **B**
- 9. **D**